



Let's recap on some of the learning we done in class. Use the number line to help you with adding.

Maths tip when you add you jump forwards on the numberline.

Making Addition Stories

- 1** Colour and add.
Write the missing numbers.

(a)

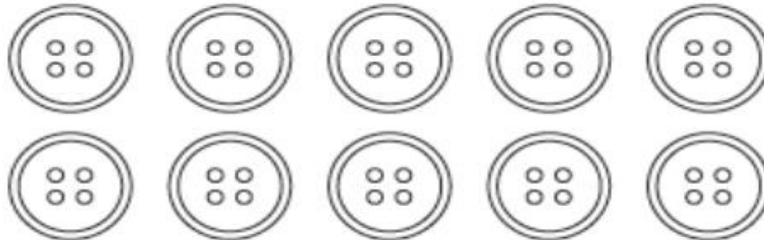


There are 4 red crayons.
There are 3 yellow crayons.

$$4 + 3 = \square$$

There are crayons altogether.

(b)




There are 2 blue buttons.
There are 8 green buttons.

$$2 + \square = \square$$

There are buttons in all.



(c)



4 apples are green.

5 apples are red.

$$\square + \square = \square$$

There are apples altogether.

2 Draw.

Write the missing numbers.

(a) Draw 4 more eggs in the basket.

$$\square + \square = \square$$

There are eggs now.



(b) Draw 5 more buttons on the shirt.

$$\square + \square = \square$$

There are buttons now.



0 to 20 Number Line



3 Write the missing numbers.

(a)



There are boys at the bus stop.

There are girls at the bus stop.

$$\square + \square = \square$$

There are children at the bus stop in all.

(b)



There are monkeys in the tree.

There is monkey on the ground.

$$\square + \square = \square$$

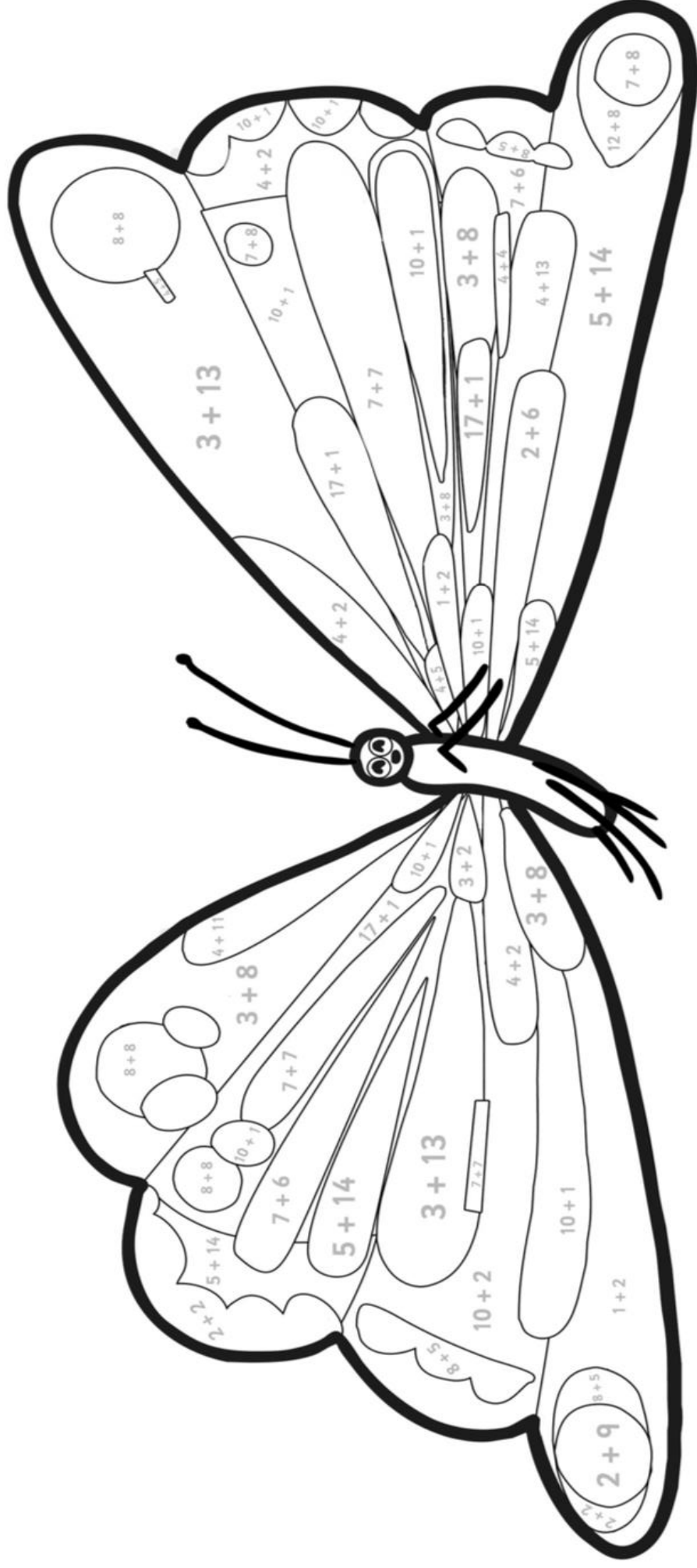
There are monkeys altogether.

0 to 20 Number Line



Addition to 20 Colour by Number

Solve the sums in the butterfly to work out what colours they should be.



3 or 11 = Yellow 4 or 12 = Orange 5 or 13 = Blue 6 or 14 = Red

7 or 15 = Purple 8 or 17 = Black 9 or 18 = Pink 10 or 19 = Green

16 or 20 = Pick your own colour!